

Saint Patrick's Day


Half Steps and Whole Steps




Identify each of the following as a half step or whole step and circle your answer.




Half Step or Whole Step




Half Step or Whole Step




Half Step or Whole Step



Half Step or Whole Step



Half Step or Whole Step



Half Step or Whole Step

